

Total number of printed pages-7

3 (Sem-6/CBCS) CHE HC 1

2025

CHEMISTRY

(Honours Core)

Paper : CHE-HC-6016



(Inorganic Chemistry-IV)

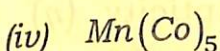
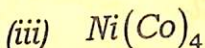
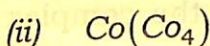
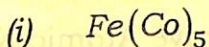
Full Marks : 60

Time : Three hours

The figures in the margin indicate full marks for the questions.

1. Answer the following questions : $1 \times 7 = 7$

(a) Which of the following complex is oxidizing agent ?



(Choose the correct option)

(b) Why is NH_4Cl added before precipitating Group III cations ?

(c) What is Schlenk equilibrium ?

(d) In the base catalysed substitution of Cl^- by $(\text{OH})^-$ in $[\text{Co}(\text{NH}_3)_5\text{Cl}]^{2+}$, the first step in the mechanism is -

(i) conversion of an amine to amido group

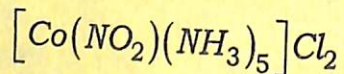
(ii) Substitution of Cl^- by $(\text{OH})^-$

(iii) dissociation of Cl^- to give a 5-coordinate intermediate

(iv) association of OH^- to give a 7 co-ordinate intermediate.

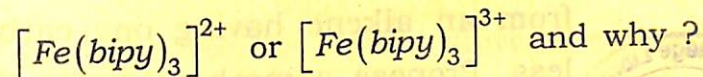
(Choose the correct option)

(e) Calculate the Effective Atomic Number (EAN) of cobalt in the complex



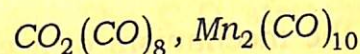
(f) What is the hapticity (η) of the cyclopentadienyl ligand in ferrocene ?

(g) Which metal complex undergoes faster outer-sphere electron transfer,



2. Answer the following questions : $2 \times 4 = 8$

(a) Draw the structures of the following :



(b) What do you understand by the term "labile" and "inert" ?

(c) Rate of water exchange for $[\text{Mo}(\text{H}_2\text{O})_6]^{3+}$ is very slow. Why ?

(d) Why do Group I cations precipitate as chlorides while Group II cations precipitate as sulfides ?

3. Answer **any three** of the following questions:

$5 \times 3 = 15$

(a) Discuss the Eigen-Wilkins mechanism of ligand substitution in octahedral complexes.

- (b) The complex $\text{CO}_2(\text{CO})_8$ can be used for the catalytic synthesis of aldehyde from an alkene having one carbon less. Propose a mechanism for this process taking a suitable example. What are the disadvantages of using this catalyst?

(c) Discuss the mechanism of acetylation of ferrocene using Friedel-Crafts catalyst.

(d) Discuss in detail the transeffect and its theories in substitution reactions of square planar complexes.

(e) Explain why : $2\frac{1}{2} \times 2 = 5$

(i) Transition metal carbonyls and other organometallic compounds almost always obey 18 electron rule.

(ii) Although aromatic, ferrocene is much more reactive compared to benzene.

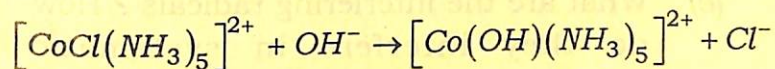
4. Answer **any three** of the following questions:

10×3=30

(a) (i) Discuss how stereochemical investigation of a substitution reaction helps in predicting the shape of a reaction intermediate. 5

(ii) The C-O stretching frequencies $[\text{Ni}(\text{CO})_4]$, $[\text{Co}(\text{CO})_4]^-$ for and $[\text{Fe}(\text{CO})]^{2-}$ are 2060, 1890 and 1790 cm^{-1} respectively Account for this. 5

(b) (i) Discuss the mechanism of the following reaction with proper experimental evidences. 5



(ii) Establish the relationship between stepwise and overall formation constants for a complexation reaction between $[\text{Cu}(\text{H}_2\text{O})_6]^{2+}$ and ethylenediamine. 5

- (c) What is synthesis gas ? What are the reaction products derived from synthetic gas ? Discuss the mechanism of water gas shift reaction using a homogeneous catalyst. What are the advantages and disadvantages of homogeneous and heterogeneous catalyst ? $1+3+4+2=10$

- (d) (i) Give the mechanism of ethene polymerization using Ziegler-Natta catalyst ? What is the role of Et_2AlCl in the process ? $3+2=5$

(ii) What is Zeise's salt ? How it is prepared from K_2PtCl_4 ? Discuss the Dewar-Chattock-Duncanson bonding model in Zeise's salt.

$$1+1+3=5$$

- (e) What are the interfering radicals ? How do they interfere in systematic separation of cationic radicals ? Why is it necessary to remove them before 3rd group analysis ? Why don't they interfere in 1st or 2nd group analysis ? How are borate, and phosphate removed after Group II analysis ? $1+1+1+1+6=10$

- (f) (i) Explain the synergistic bonding model in transition metal carbonyl complex clearly showing the orbital overlap diagrams. 5

- (ii) Using MO theory explain the two electron-four centered ($2e-4c$) bonding in methyl-lithium tetramer. 5

