

Total number of printed pages-4

3 (Sem-6/CBCS) GGY HE 3

2024

**GEOGRAPHY**

(Honours Elective)

Paper : GGY-HE-6036


**(Geography of Tourism)**

Full Marks : 60

Time : Three hours

**The figures in the margin indicate full marks for the questions.**

1. Select the correct answer/Answer the following :  $1 \times 7 = 7$
- (a) Which one of the following is an adventure tourism ?
- (i) Swimming
  - (ii) Bowling
  - (iii) Bungee jumping
  - (iv) Chess
- (b) Recreation is a
- (i) product
  - (ii) service
  - (iii) privilege of a tour operator
  - (iv) privilege of a tour guide



Contd.

(c) A traveller, who visits Mecca for the purpose of performing Hajj, is a/an

- (i) excursionist
- (ii) religious tourist
- (iii) tourist
- (iv) Both (i) and (ii)

(d) Which one of the following is not a place of religious significance ?

- (i) Puri
- (ii) The Vatican
- (iii) Jerusalem
- (iv) Riyadh

(e) Leisure is a/an

- (i) concept
- (ii) activity
- (iii) adventure
- (iv) timeframe

(f) What is the slogan of Assam Tourism ?

(g) What do you mean by excursionist ?

2. Answer the following questions in very brief :  
2×4=8

(i) Which is the famous lake of North-East India and why is it famous for ?

(ii) Write *any two* of Robinson's geographical parameters of tourism.

(iii) Mention *two* differences between recreation and leisure.

(iv) Define medical tourism.

Write short notes on the following :  
**(any three)** 5×3=15


(i) Cultural tourism resources of India

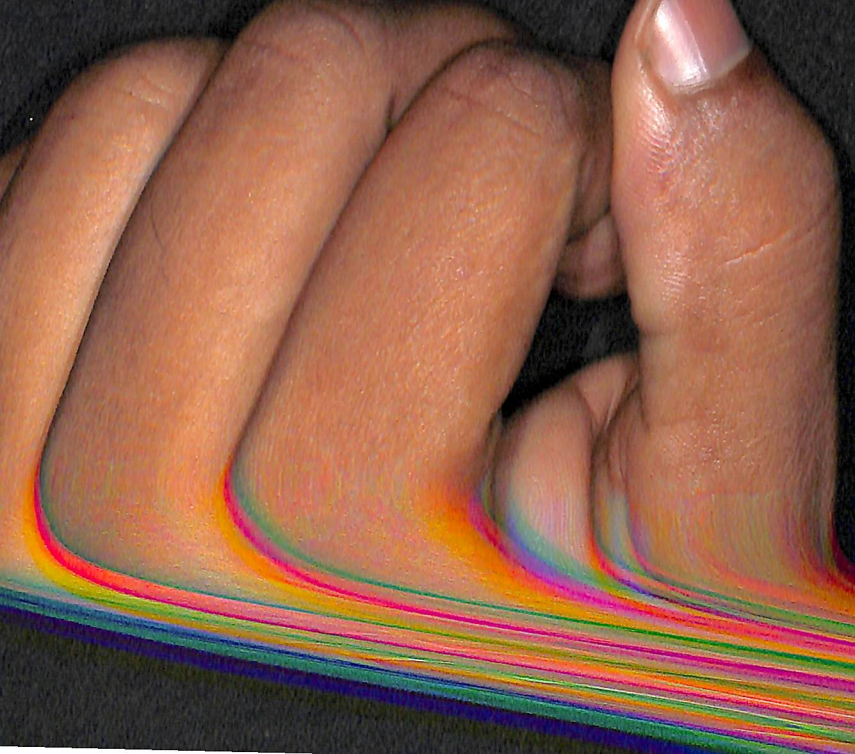
(ii) Recent trends in medical tourism in India

(iii) Relevance of sustainability in tourism industry

(iv) Impact of tourism on Indian economy and environment

(v) Tourism development in Himalayan areas of India





4. Answer **any three** from the following questions : 10×3=30

(i) Classify the tourism resources of North-East India and describe their significance for promoting tourism industry in the region. 4+6=10

(ii) Define agri-tourism. Discuss the future of agritourism in India. 2+8=10

(iii) Write in brief about the pilgrimage tourism potential of India, with special reference to Assam. 6+4=10

(iv) What is the role of infrastructure in tourism development in India? Discuss the national tourism policies and prospects. 6+4=10

(v) Differentiate between domestic and International tourism. How can international tourism be promoted in India? 5+5=10

(vi) What is nature tourism and how is it different from eco-tourism? Explain briefly. 4+6=10