

Total number of printed pages-8

3 (Sem-4/CBCS) CHE HC 2

2024

**CHEMISTRY**

(Honours Core)

Paper : CHE-HC-4026


**(Organic Chemistry-III)**

Full Marks : 60

Time : Three hours

***The figures in the margin indicate full marks for the questions.***

1. Answer the following questions :  $1 \times 7 = 7$
- (a) Write *aciform* structure of nitromethane.
  - (b) The aliphatic diazonium compounds are unstable, why ?
  - (c) What is special isoprene rule ?
  - (d) Mention *one* medicinal importance of nicotine.



Contd.

(e) Arrange the following compounds in increasing order of aromatic character :

Thiophene, pyrrole, benzene, furan

(f) Mention *two* adverse effects of PAN on living organisms.

(g) What class of alkaloid does nicotine belong to ?

2. Answer **any four** of the following questions :  
2×4=8

(a) Write the products formed in each of the following reactions :

(i) Cyanoethane is reduced with  $\text{LiAlH}_4$

(ii) Nitrobenzene is heated with a mixture of conc.  $\text{HNO}_3$  and conc.  $\text{H}_2\text{SO}_4$

(b) Mention *two* synthetic applications of diazonium salts with their chemical reactions.

(c) Explain why Naphthalene gives 1-Naphthalene sulphonic acid at low temperature and 2-Naphthalene sulphonic acid at high temperature.

(d) Write down the different steps involved in Bischler-Napieralski reaction leading to synthesis of isoquinoline.

(e) How can you show that

(i)  $\alpha$ -terpineol is a 3° alcohol

(ii) geraniol has *E*-configuration

(f) What product is formed in each case when citral is allowed to react with

(i)  $\text{NaOH}(\text{aq})$

(ii)  $\text{KHSO}_4$

3. Answer **any three** questions from the following :  
5×3=15

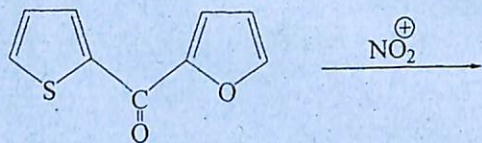
(a) Mention *two* nitrating agents employed in direct nitration of arenes ? Explain the reaction mechanism of nitration of benzene. The 2,4,6-trinitrophenol is known as Picric acid although it does not contain a carboxyl group — why ?

2+2+1=5



(b) Explain the role of resonance effect on basic properties of aliphatic amines with special reference to isomers of nitroanilines. Explain with appropriate structures, why N,N-dimethylpicramide is more basic than picramide. 3+2=5

(c) Why does electrophilic substitution of Furan usually take place at C-2 position? Write Paal-Knorr synthesis of Furan. Write the product(s) of the following reaction. (structure and name). 2+2+1=5

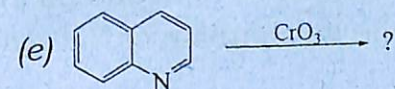
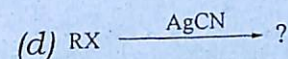
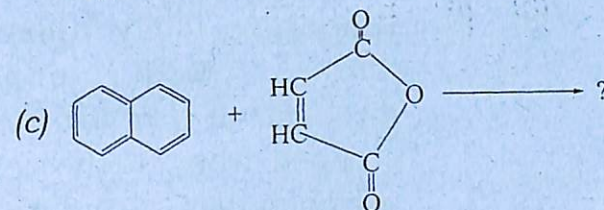
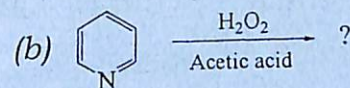
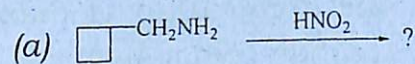


(d) Write the different products when anthracene is reacted with the following reactants : 1×5=5

- (i) Sodium in THF
- (ii) Sodium in amyl alcohol
- (iii) Hydrogen gas over Ni
- (iv)  $\text{Na}_2\text{Cr}_2\text{O}_7/\text{H}_2\text{SO}_4$
- (v)  $\text{HNO}_3$  in glacial acetic acid



(e) Write the product of the following reactions : 1×5=5



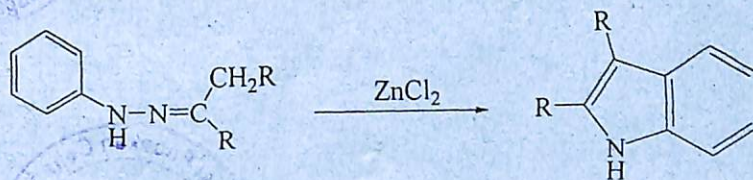
4. Answer **any three** questions from the following : 10×3=30

(a) (i) Discuss the structural difference between nitroalkanes and alkyl nitriles. Discuss how one can be distinguished from the other. Mention *two* chemical tests.

2+3=5

- (ii) Elaborate the mechanism of diazotization of aniline. Mention one application of diazotization reaction. What happens when an aliphatic primary amine is diazotized?  $3+1+1=5$
- (b) (i) Elaborate isocyanide test for amines with appropriate mechanism. How can reaction be stopped from further release of poisonous gas? Write the reaction.  $3+1+1=5$
- (ii) Why do aliphatic nitro compounds dissolve in aqueous alkali? Write the mechanism of Nef reaction.  $2+3=5$
- (c) (i) Explain why the electrophilic substitution in naphthalene takes place mainly at the 1-position? 2
- (ii) How will you prepare 2-nitronaphthalene starting from naphthalene? 2
- (iii) Write Haworth synthesis for phenanthrene. 3

- (iv) Explain the peri-hydrogen interaction in particularly in sulphonation of naphthalene. 3
- (d) (i) Give reasons for the following:  $2+1+2=5$
- (a) Furan shows Diels-Alder cycloaddition
- (b) Pyrrole readily polymerizes in presence of mineral acids
- (c) Pyridine is less reactive in compare with benzene towards electrophiles.
- (ii) Write the steps involved in the following conversion. Also mention the name of the synthesis.  $4+1=5$



- (e) (i) How many carbon atoms are present in sesqui and a diterpene? Write a synthesis of geraniol. What products will be formed on ozonolysis of geraniol?  $1+3+1=5$

- (ii) Write *four* general properties of alkaloids. Mention a chemical test that is helpful in structure elucidation of an alkaloid. Draw the structure of nicotine and show how the nature of nitrogen atoms has been established.  $2+1+1+1=5$
- (f) (i) Name the type of hygrine alkaloid and its biological source. 2
- (ii) Write *two* medicinal importances each of hygrine and reserpine.  $2+2=4$
- (iii) How is cocaine used as medicine? 2
- (iv) What is Emde's modification? 2

